

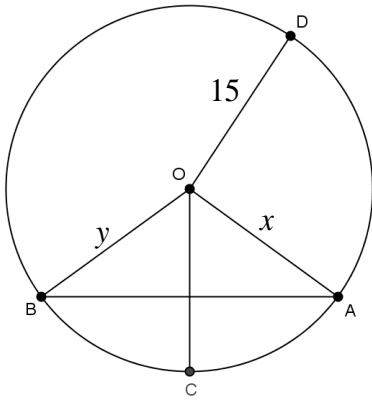
# Math 9

## 9.0 – Review: Right Triangles & Circles

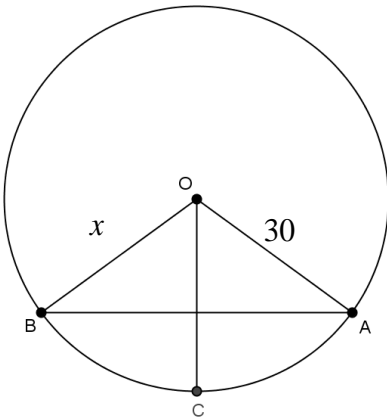
Name: \_\_\_\_\_

Date: \_\_\_\_\_

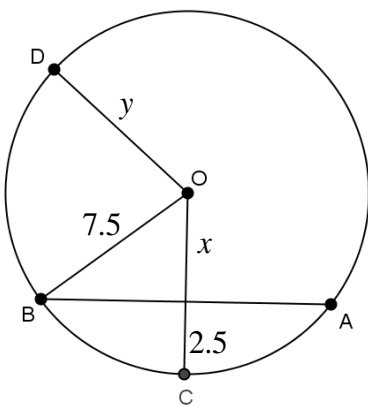
### Practice



Find the values of  $x$ ,  $y$ ,  $OC$ .

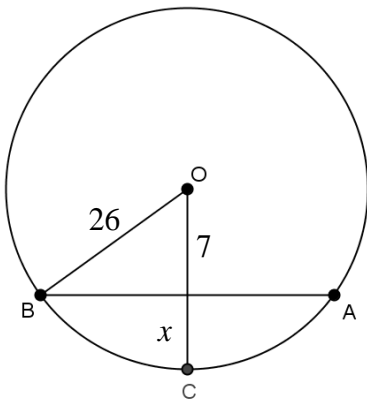


Find the value of  $x$ .

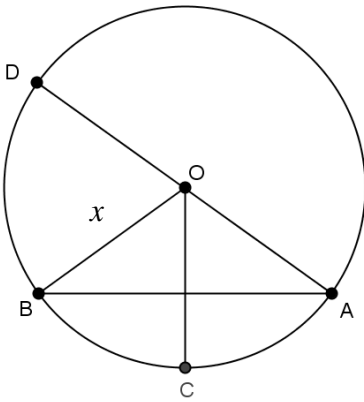


Find the value of  $x$ .

Find the value of  $x$  .



Given  $AD = 50$  , find the value of  $x$  .



Find the values of  $x$ ,  $y$  .

