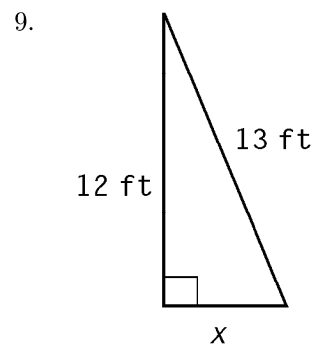
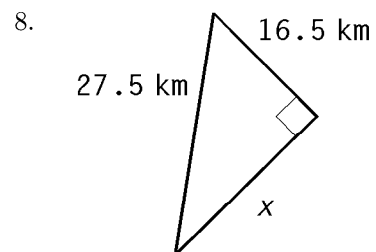
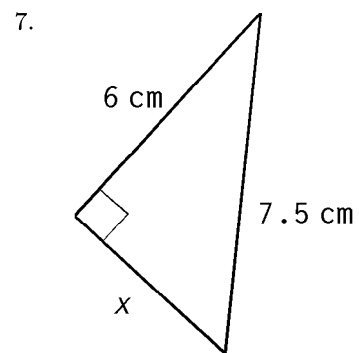
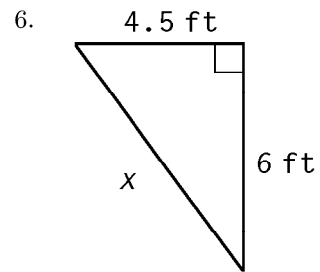
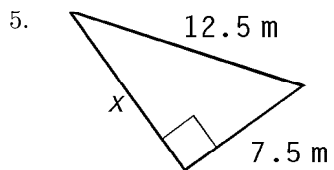
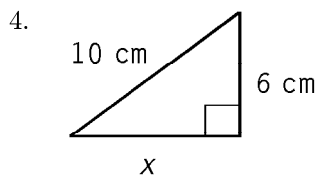
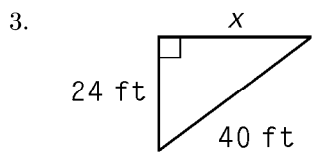
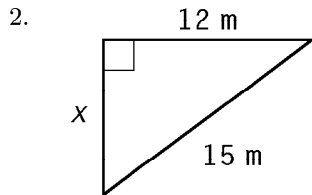
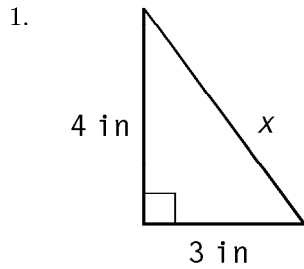
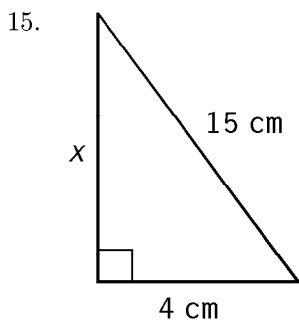
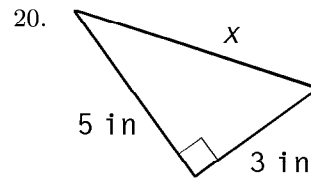
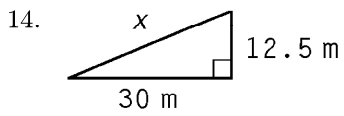
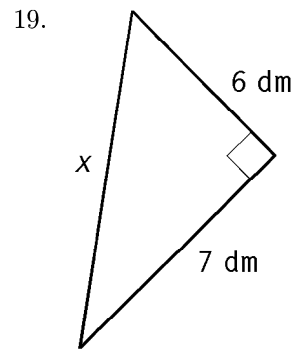
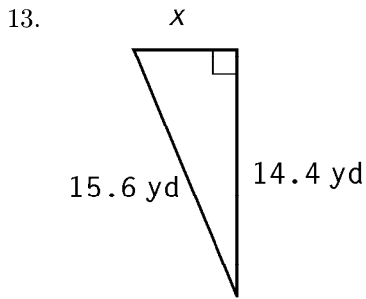
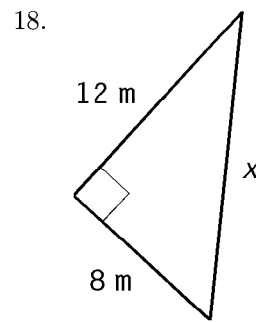
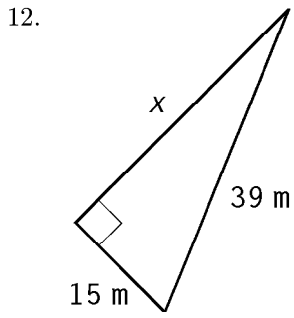
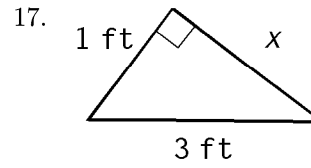
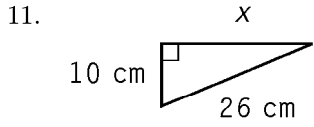
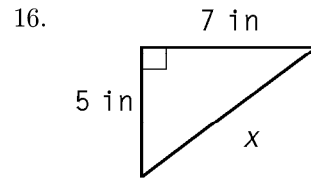
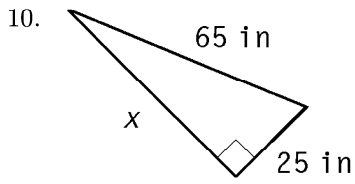


Find the length of the missing side.





1.  
Answer:      5 in
2.  
Answer:      9 m
3.  
Answer:      32 ft
4.  
Answer:      8 cm
5.  
Answer:      10 m
6.  
Answer:      7.5 ft
7.  
Answer:      4.5 cm
8.  
Answer:      22 km
9.  
Answer:      5 ft
10.  
Answer:      60 in
11.  
Answer:      24 cm
12.  
Answer:      36 m
13.  
Answer:      6 yd
14.  
Answer:      32.5 m
15.  
Answer:      about 14.5 cm
16.  
Answer:      about 8.6 in
17.  
Answer:      about 2.8 ft
18.  
Answer:      about 14.4 m
19.  
Answer:      about 9.2 dm
20.  
Answer:      about 5.8 in